



# Victorian Certificate of Education 2009

SUPERVISOR TO ATTACH PROCESSING LABEL HERE

## STUDENT NUMBER

Letter

Figures

Words


# CHEMISTRY

## Written examination 1

Wednesday 10 June 2009

Reading time: 11.45 am to 12.00 noon (15 minutes)

Writing time: 12.00 noon to 1.30 pm (1 hour 30 minutes)

## QUESTION AND ANSWER BOOK

### Structure of book

Section	Number of questions	Number of questions to be answered	Number of marks
A	20	20	20
B	10	10	53
			Total 73

- Students are permitted to bring into the examination room: pens, pencils, highlighters, erasers, sharpeners, rulers and one scientific calculator.
- Students are NOT permitted to bring into the examination room: blank sheets of paper and/or white out liquid/tape.

### Materials supplied

- Question and answer book of 25 pages.
- A data book.
- Answer sheet for multiple-choice questions.

### Instructions

- Write your **student number** in the space provided above on this page.
- Check that your **name** and **student number** as printed on your answer sheet for multiple-choice questions are correct, **and** sign your name in the space provided to verify this.
- All written responses must be in English.

### At the end of the examination

- Place the answer sheet for multiple-choice questions inside the front cover of this book.
- You may keep the data book.

**Students are NOT permitted to bring mobile phones and/or any other unauthorised electronic devices into the examination room.**

**SECTION A – Multiple-choice questions****Instructions for Section A**

Answer **all** questions in pencil on the answer sheet provided for multiple-choice questions.

Choose the response that is **correct** or that **best answers** the question.

A correct answer scores 1, an incorrect answer scores 0.

Marks will **not** be deducted for incorrect answers.

No marks will be given if more than one answer is completed for any question.


**Question 1**

The most appropriate technique to determine levels of the  $\text{Pb}^{2+}$  ion in blood is

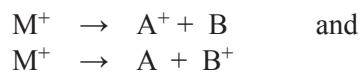
- A. mass spectrometry.
- B. infrared spectroscopy.
- C. atomic absorption spectroscopy.
- D. high-performance liquid chromatography.

**Question 2**

A sample of compound M is analysed in a mass spectrometer where it forms the molecular ion  $\text{M}^+$  according to

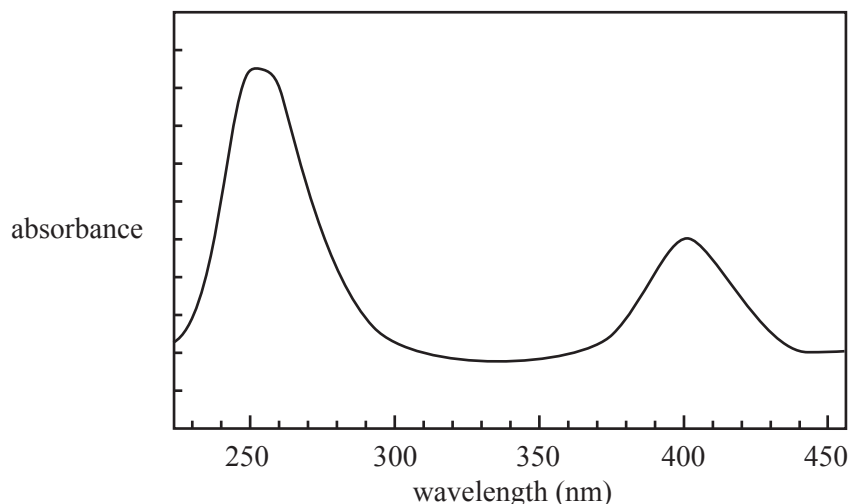


Some of the molecular ions fragment as follows.



The mass spectrum would show peaks due to the species

- A.  $\text{M}^+$ , A,  $\text{A}^+$ , B and  $\text{B}^+$  only.
- B.  $\text{M}^+$ ,  $\text{A}^+$  and  $\text{B}^+$  only.
- C.  $\text{A}^+$  and  $\text{B}^+$  only.
- D. A and B only.

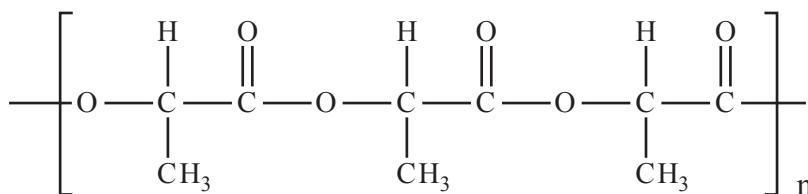
**Question 3**

The UV-visible spectrum of a solution of a certain compound is shown above. Consider the following statements about this compound and its UV-visible spectrum.

- I The amount of light absorbed by a solution of this compound depends on its concentration.
- II The amount of light absorbed by a solution of this compound depends on the wavelength of light used.
- III The spectrum is a result of electrons falling back from higher to lower electronic energy levels.
- IV The concentration of a solution of this compound can only be determined by UV-visible spectroscopy at 250 nm.

Which of the above statements are true?

- A. I and II
- B. II and III
- C. I, II and III
- D. I, II and IV

**Question 4**

The polymer polylactic acid, PLA, shown above, is used to make soluble stitches which are absorbed by the body following surgery.

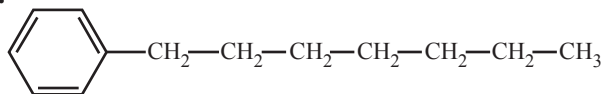
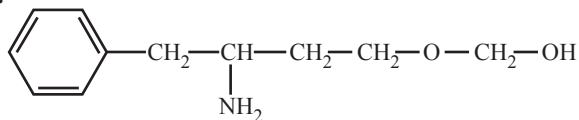
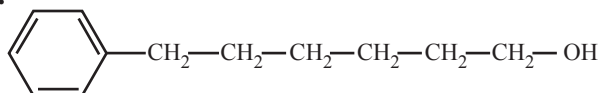
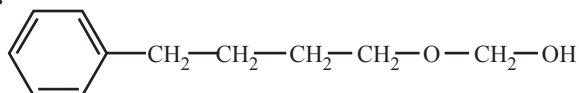
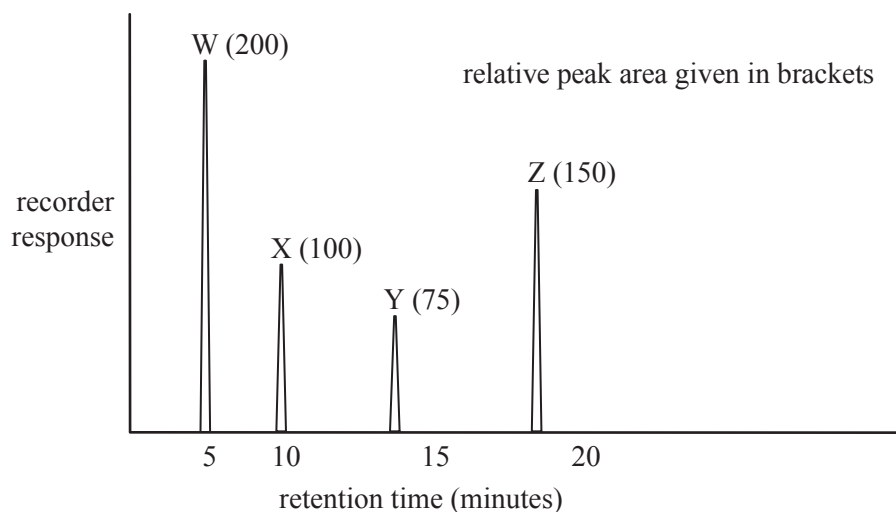
Other than the peak given by the TMS reference, the monomer from which PLA is formed would give

- A. one set of peaks in the  $^1\text{H}$  NMR
- B. two sets of peaks in the  $^1\text{H}$  NMR
- C. three sets of peaks in the  $^1\text{H}$  NMR
- D. four sets of peaks in the  $^1\text{H}$  NMR

**Question 5**

Reverse-phase high-performance liquid chromatography (HPLC) uses a non-polar stationary phase together with a polar mobile phase.

Which of the following molecules will have the greatest retention time on such a reverse phase column?

**A.****B.****C.****D.****Question 6**

The above diagram shows the gas chromatogram of a sample containing four straight chain alkanes. The following statements refer to this chromatogram.


- I The boiling points of the compounds arranged from highest to lowest are  $Z > Y > X > W$ .
- II The retention times will stay the same if the temperature at which the chromatogram is recorded is increased, all other conditions remaining constant.
- III Hydrogen gas could have been used as a carrier gas to obtain this chromatogram.

Which of the above statements are true?

- A. I only
- B. I and II only
- C. I and III only
- D. II and III only

**Question 7**

When solid sodium hydride, NaH, is added to water, the hydride ion reacts according to the following equation.



This reaction can be classified as

- A. acid-base only.
- B. oxidation-reduction only.
- C. both acid-base and oxidation-reduction.
- D. neither acid-base nor oxidation-reduction.

*Questions 8 and 9 refer to the following information.*

0.132 g of a pure carboxylic acid (R-COOH) was dissolved in 25.00 mL of water and titrated with 0.120 M NaOH solution. A volume of 14.80 mL was required to reach the endpoint of the titration.

**Question 8**

The carboxylic acid could be

- A. HCOOH
- B. CH<sub>3</sub>COOH
- C. C<sub>2</sub>H<sub>5</sub>COOH
- D. C<sub>3</sub>H<sub>7</sub>COOH

**Question 9**

Which of the following best represents the pH of the solution at the equivalence point and the name of a suitable indicator for this titration?

- | pH at the equivalence point | suitable indicator |
|-----------------------------|--------------------|
| A. less than 7              | phenolphthalein    |
| B. less than 7              | bromophenol blue   |
| C. greater than 7           | phenolphthalein    |
| D. greater than 7           | bromophenol blue   |

**Question 10**

The level of carbon dioxide in the air in a spacecraft can be controlled by passing the air through canisters containing lithium hydroxide, LiOH.

In a laboratory trial, the air in a 5.00 L container at  $1.10 \times 10^2$  kPa and 25.0°C was passed through a canister of LiOH. The pressure of the air in the container decreased to  $1.00 \times 10^2$  kPa, measured at 25.0°C.

The mass of CO<sub>2</sub> absorbed from the air sample by the LiOH in the canister was

- A. 0.89 g
- B. 9.77 g
- C. 10.6 g
- D. 116 g

**Question 11**

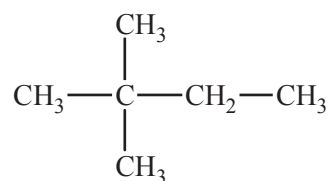
Which one of the following statements about propene is **not** correct?

- A. It undergoes an addition reaction with hydrogen to form propane.
- B. It undergoes a polymerisation reaction expelling water in the process.
- C. Weak dispersion forces act between propene molecules and consequently it is a gas at room temperature.
- D. One propene molecule will react with excess oxygen to produce three molecules of water and three molecules of carbon dioxide.

**Question 12**

In a particular chlorination reaction, a single hydrogen atom of 2,2-dimethylbutane,  $C_6H_{14}$ , is replaced by one chlorine atom. More than one compound of formula  $C_6H_{13}Cl$  will be formed.

A structure of 2,2-dimethylbutane is provided below.

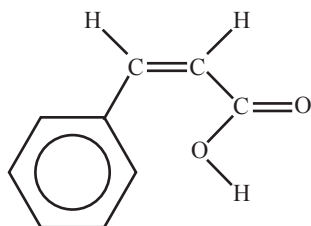


The number of different compounds that could be formed in this monosubstitution reaction is

- A. 2
- B. 3
- C. 4
- D. 5

**Question 13**

Cinnamic acid is an organic substance that partly contributes to the flavour of oil of cinnamon. A structure of cinnamic acid is given below.

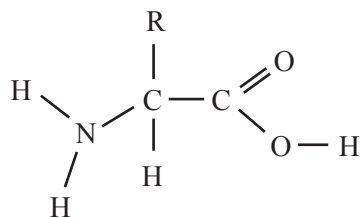
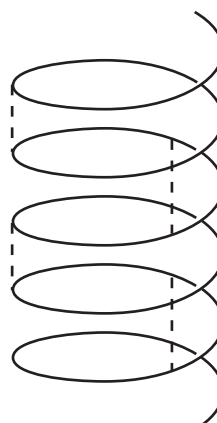
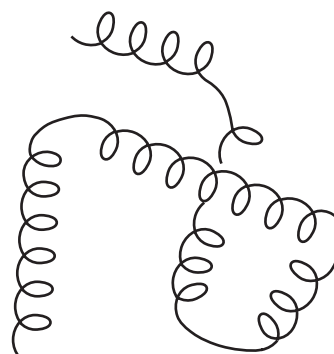


Which of the following reagents would you expect to react with cinnamic acid under the conditions given below?

$\text{CH}_2\text{CH}_2$ and catalyst	$\text{Br}_2(\text{aq})$ at room temperature	$\text{CH}_3\text{OH}$ and $\text{H}_2\text{SO}_4$ catalyst
A. Yes	Yes	Yes
B. Yes	No	Yes
C. No	Yes	Yes
D. No	Yes	No

**Question 14**

A student's study notes on protein structure included these four unlabelled sketches.

**I****II****III****IV**

Which sketches best represent the primary, secondary and tertiary structure of proteins?

	<b>primary structure</b>	<b>secondary structure</b>	<b>tertiary structure</b>
<b>A.</b>	I	II	IV
<b>B.</b>	I	IV	II
<b>C.</b>	III	IV	II
<b>D.</b>	III	II	IV

**Question 15**

The tertiary structure of proteins may be maintained by

- A.** hydrogen bonding.
- B.** ionic interactions.
- C.** covalent bonds.
- D.** all of the above.

**Question 16**

In response to a pain stimulus, the brain produces small polypeptide molecules called enkephalins. These molecules block the transmission of pain through the central nervous system.

The amino acid sequence in one such compound, methionine enkephalin, is



The number of amine, carboxylic acid and amide (peptide) functional groups in this polypeptide is

	$-\text{NH}_2$	$-\text{COOH}$	$-\text{CONH}$
A.	0	0	5
B.	1	1	4
C.	1	1	5
D.	0	2	4

**Question 17**

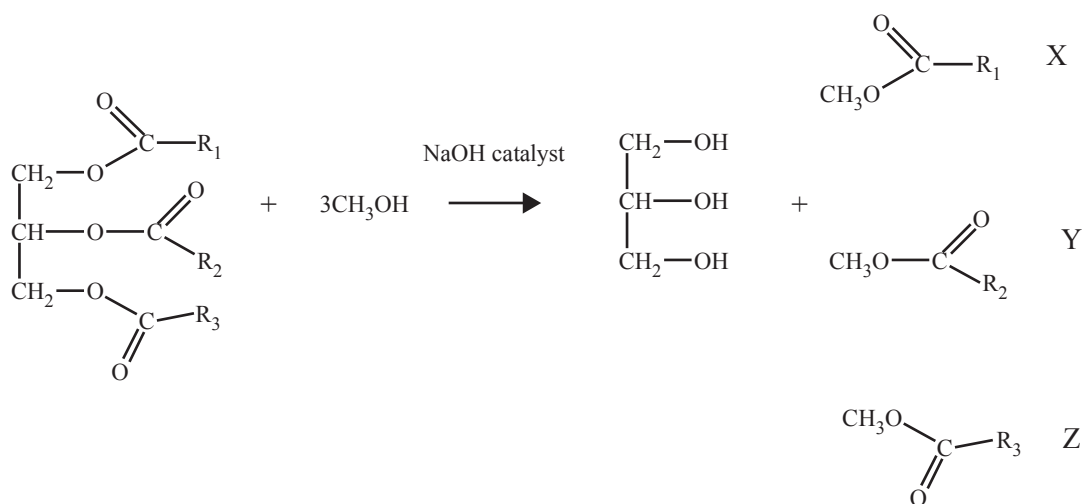
Which one of the following statements about enzymes is **not** true?

- A. Enzymes can only be denatured by an increase in temperature.
- B. Enzymes may form temporary ion-dipole bonds with substrate molecules.
- C. Enzymes speed up reactions by holding substrate molecules in positions necessary for reaction.
- D. The tertiary structure of an enzyme may be altered if one amino acid in its primary structure is substituted for another, different amino acid.

**Question 18**

A product derived from palm tree oil is used as an alternative fuel in diesel engines.

Palm oil is converted to biodiesel by the following reaction.

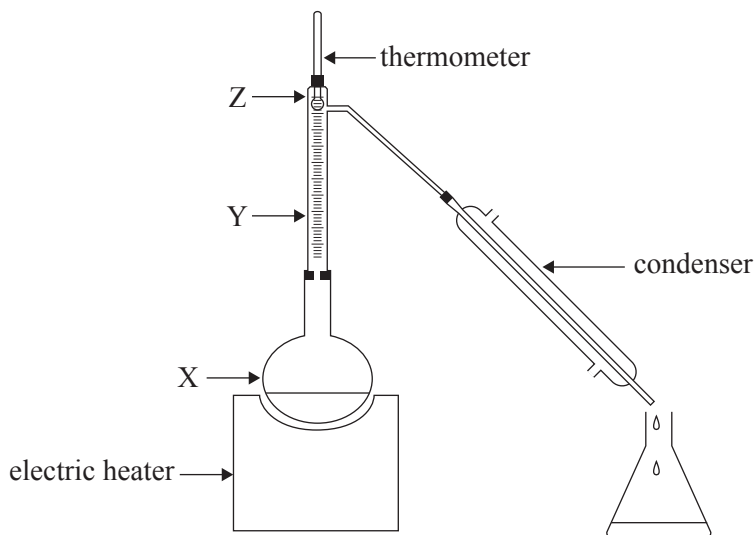


Glycerol is separated from the reaction mixture. The mixture of the compounds labelled X, Y and Z is used as palm oil biodiesel.

The term that best describes the mixture of compounds in palm oil biodiesel is

- A. methyl esters.
- B. carbohydrates.
- C. carboxylic acids.
- D. monoglycerides.



**Question 19**

A liquid mixture of 50% ethanol and 50% water was distilled in the apparatus shown above. The boiling point of ethanol is  $78^{\circ}\text{C}$  and that of water is  $100^{\circ}\text{C}$ .

As the mixture was heated the temperature shown by the thermometer initially rose but then remained constant at  $78^{\circ}\text{C}$  for some time.

Which one of the following statements about percentage of ethanol in the vapours shown at points X, Y and Z, when the temperature is at a constant  $78^{\circ}\text{C}$ , is true?

- A. The percentage of ethanol in the vapours at X is equal to 50%.
- B. The percentages of ethanol in the vapours increase in order at positions X, Y and Z.
- C. The percentages of ethanol in the vapours at Y and Z are equal but greater than at X.
- D. The percentages of ethanol in the vapours at X, Y and Z are equal but greater than 50%.

**Question 20**

The separation and identification of proteins that can be used as disease markers is an exciting area of research. Researchers must separate and identify proteins that could be used as disease markers from the many thousands of proteins that exist in our bodies.

Which of the following sequence of techniques could be used to

- i. separate these molecules, then
  - ii. accurately determine their molecular mass, and then
  - iii. determine their molecular structure.
- A. NMR spectroscopy, followed by mass spectrometry, followed by high-performance liquid chromatography
  - B. high-performance liquid chromatography, followed by mass spectrometry, followed by NMR spectroscopy
  - C. high-performance liquid chromatography, followed by infrared spectroscopy, followed by mass spectrometry
  - D. mass spectrometry, followed by high-performance liquid chromatography, followed by infrared spectroscopy

**SECTION B – Short answer questions****Instructions for Section B**

Answer **all** questions in the spaces provided.

To obtain full marks for your responses you should

- give simplified answers with an appropriate number of significant figures to all numerical questions; unsimplified answers will not be given full marks.
- show all working in your answers to numerical questions. No credit will be given for an incorrect answer unless it is accompanied by details of the working.
- make sure chemical equations are balanced and that the formulas for individual substances include an indication of state; for example,  $\text{H}_2(\text{g})$ ;  $\text{NaCl}(\text{s})$

**Question 1**

2-chloro-3-methylpentane and 2-chloro-3-methylhexane were dissolved together and the mixture was analysed using gas chromatography. The chromatogram of this mixture produced the following peak areas.

compound	peak area
$1.06 \times 10^{-3}$ mol of 2-chloro-3-methylpentane	922 units
$1.53 \times 10^{-3}$ mol of 2-chloro-3-methylhexane	1570 units

- a. Draw a structural formula of **either** 2-chloro-3-methylpentane or 2-chloro-3-methylhexane, clearly showing all bonds.

1 mark

- b. Which molecule would you expect to have the shortest retention time in the chromatography column?  
Explain your answer.

---

---

1 mark

- c. In another experiment,  $0.57 \times 10^{-3}$  mol of 2-chloro-3-methylpentane was analysed in a different mixture under the same conditions.

What would be the expected peak area on the chromatogram associated with this amount of 2-chloro-3-methylpentane?

---

---

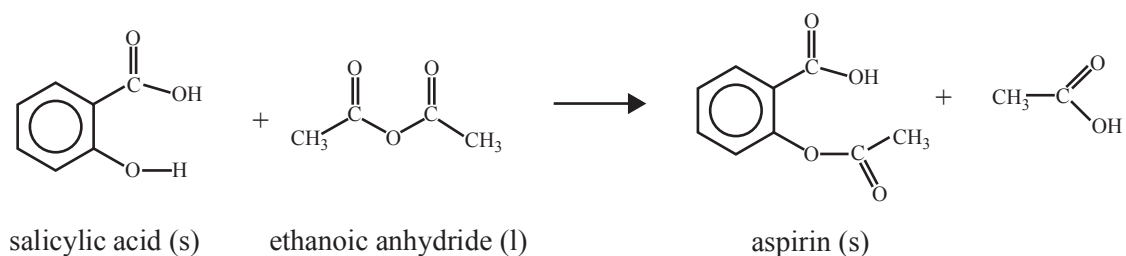
1 mark

Total 3 marks

**Question 2**

A sample of aspirin was prepared by reacting 2.20 g of salicylic acid with 4.20 mL of ethanoic anhydride in a conical flask. After heating for 20 minutes the reaction mixture was cooled and white crystals precipitated. The crystals were then collected, dried to constant mass and weighed.

The equation for the reaction is



The following results were obtained.

mass of salicylic acid	2.20 g
volume ethanoic anhydride	4.20 mL
mass product	2.25 g

Use the following data to answer the questions below.

	molar mass (g mol <sup>-1</sup> )	density (g mL <sup>-1</sup> )
aspirin	180	
ethanoic anhydride	102	1.08
salicylic acid	138	

- a. i. Calculate the initial amount, in moles, of salicylic acid used in this preparation.

---



---

- ii. What initial amount, in moles, of ethanoic anhydride was used?

---



---



---

- iii. What is the maximum mass of aspirin that can theoretically be produced from these reagents?

---



---



---

- iv. Determine the percentage yield in this preparation.

---



---

4 marks

- b. Describe how the purity of the product could be **qualitatively** determined using thin layer chromatography. Both salicylic acid and aspirin can be detected using ultraviolet light. Ethyl ethanoate can be used as a suitable solvent.

---



---



---



---

2 marks

Salicylic acid reacts with aqueous  $\text{FeCl}_3$  to form a purple compound. Aspirin does not react with aqueous  $\text{FeCl}_3$ .

- c. Describe how the purity of the product could be **quantitatively** determined using UV-visible spectroscopy.

---



---



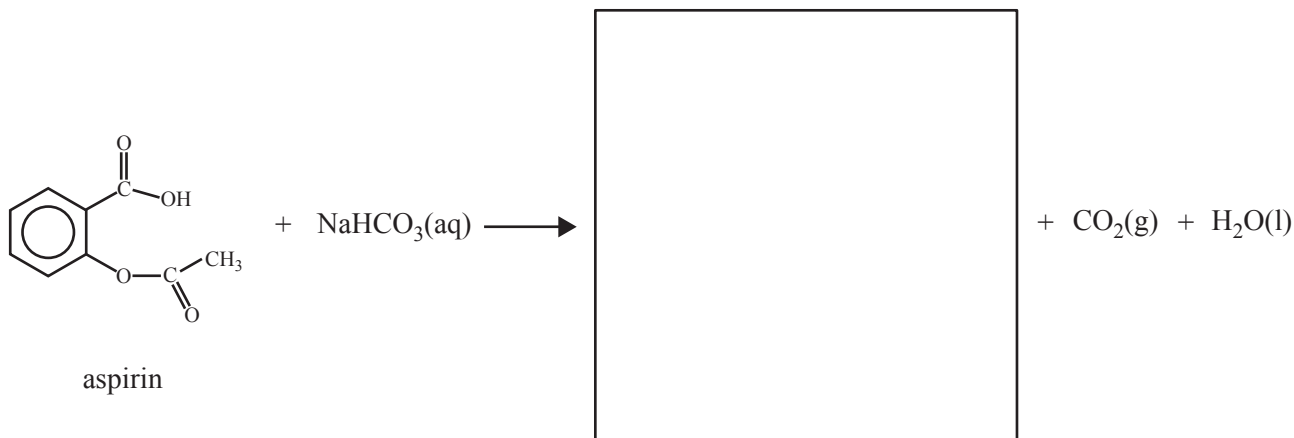
---



---

3 marks

- d. The sodium salt of aspirin is more soluble than aspirin itself. This salt may be synthesised by reaction between aspirin and sodium hydrogen carbonate as follows.



- i. In the box provided, give the complete structure for the sodium salt of aspirin.
- ii. Explain why the sodium salt of aspirin is more water-soluble than aspirin.

---



---



---

2 marks

Total 11 marks

**SECTION B** – continued  
**TURN OVER**

**Question 3**

A student is to accurately determine the concentration of a solution of sodium hydrogencarbonate in a titration against a standard solution of hydrochloric acid, HCl.

The first step in this experiment is to accurately dilute 100.0 mL of a 1.00 M HCl stock solution to a 0.100 M solution using a 1.00 L volumetric flask.

However, instead of using distilled water in the dilution, the student mistakenly adds 900.0 mL of 0.0222 M sodium hydroxide, NaOH, solution.

- a. Write an equation for the reaction that occurs in the 1.00 L volumetric flask.

---

1 mark

- b. Calculate the concentration of the hydrochloric acid in the 1.00 L volumetric flask after the student added the sodium hydroxide solution. Give your answer to correct significant figures.

---

---

---

---

---

2 marks

The student then uses this contaminated hydrochloric acid solution to determine the accurate concentration of the unknown sodium hydrogencarbonate solution.

- c. Will the calculated concentration of sodium hydrogencarbonate solution be greater or smaller than the true value? Justify your answer.

---

---

---

1 mark

Total 4 marks

**Question 4**

Myrcene is a naturally occurring compound found in the leaves of bay trees. It is known to be a polyunsaturated hydrocarbon. It can react with hydrogen to produce a saturated hydrocarbon.

In a laboratory investigation, a 1.00 g sample of pure myrcene fully reacted with exactly 510 mL of hydrogen gas measured at 20.0°C and 105.0 kPa. In this reaction, myrcene was converted to a saturated alkane with a molecular formula  $C_{10}H_{22}$ .

- a. What type of reaction has occurred between the myrcene and hydrogen?

\_\_\_\_\_

1 mark

- b. Calculate the amount, in moles, of hydrogen reacting.

\_\_\_\_\_  
\_\_\_\_\_  
\_\_\_\_\_

1 mark

- c. Calculate the mass of  $C_{10}H_{22}$  produced in the reaction.

\_\_\_\_\_  
\_\_\_\_\_  
\_\_\_\_\_

2 marks

- d. Determine the number of double bonds in each molecule of myrcene.

\_\_\_\_\_  
\_\_\_\_\_  
\_\_\_\_\_  
\_\_\_\_\_  
\_\_\_\_\_

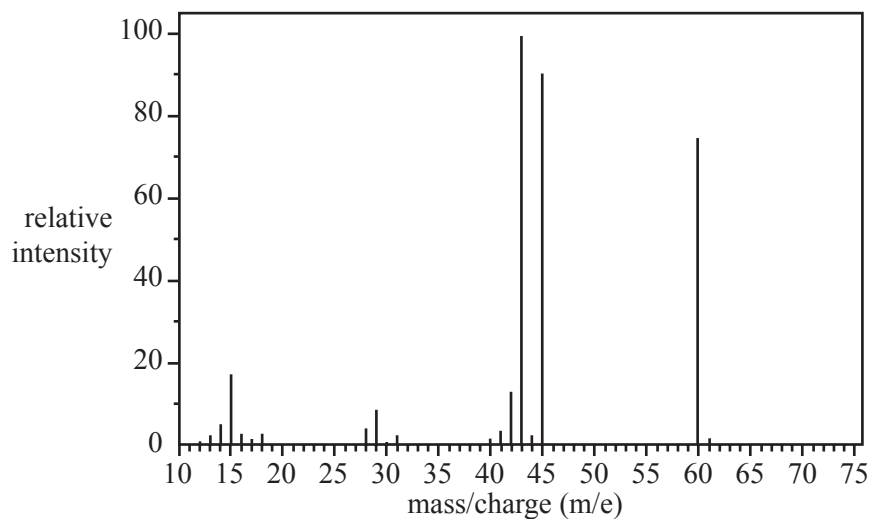
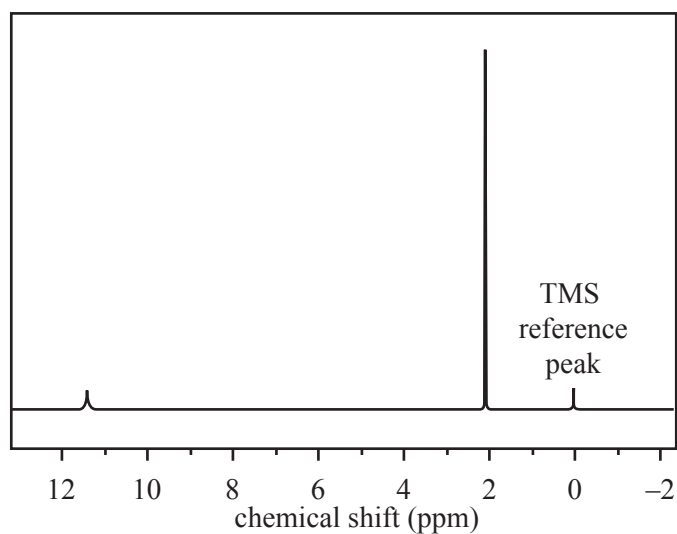
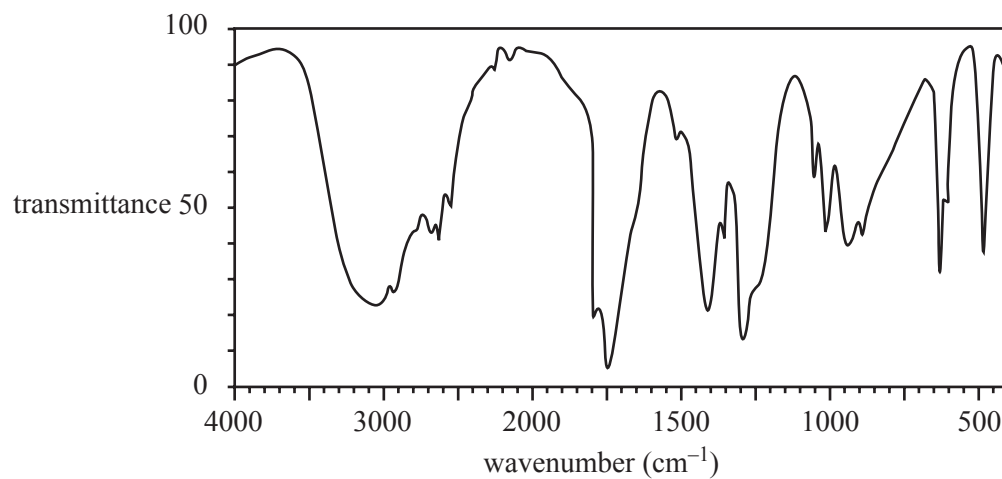
2 marks

Total 6 marks

**Question 5**

The structure of an organic molecule, with empirical formula  $\text{CH}_2\text{O}$ , is determined using spectroscopic techniques.

The mass spectrum, infrared spectrum and  $^1\text{H}$  NMR spectrum for this molecule are given below.

**mass spectrum** **$^1\text{H}$  NMR spectrum****infrared spectrum**



Use the information provided by these spectra to answer the following questions.

- a. What is the molecular formula of this molecule?

\_\_\_\_\_ 1 mark

- b. How many different proton environments are there in this molecule?

\_\_\_\_\_ 1 mark

- c. Draw the structure of the unknown molecule, clearly showing all bonds.

1 mark

- d. Explain how the structure of the compound you have drawn in **part c.** is consistent with its IR spectrum.

\_\_\_\_\_  
\_\_\_\_\_ 1 mark

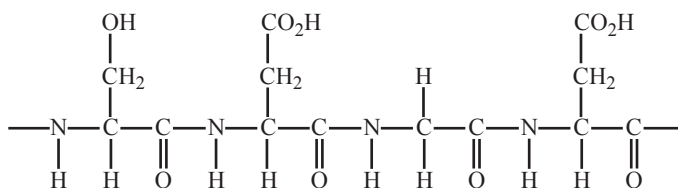
- e. Name the compound you have drawn in **part c.**

\_\_\_\_\_ 1 mark

Total 5 marks

**Question 6**

- a. The following structure shows part of a polypeptide.



- i. Name the amino acids that make up this section of the polypeptide.

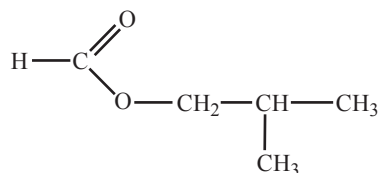
---

At a particular pH, an amino acid in solution can exist as ions that have both a negative and positive charge. These ions are called zwitterions.

- ii. Choose **one** of the amino acids in this section of polypeptide and draw the structure of its zwitterion clearly showing all bonds.

2 marks

- b. Many esters are used as flavouring agents in food. The structure of the ester used in raspberry flavouring is provided below.



Give the names of **two** carbon compounds that can be used to synthesise this ester.

---



---

2 marks

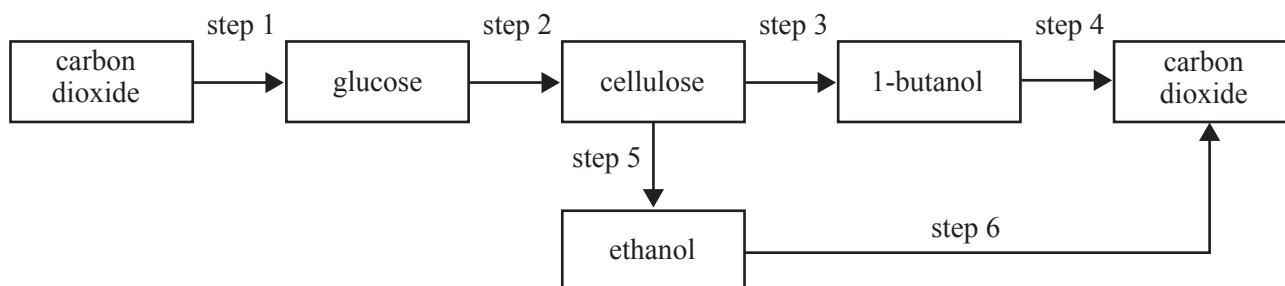
Total 4 marks

**SECTION B** – continued

**Question 7**

Research is being conducted into the development of new biofuels. It is known that a type of bacteria, *clostridium acetobutylicum*, converts cellulose to butanol.

The following diagram represents a series of steps (which may involve multiple reactions) for the formation and combustion of the biofuels, ethanol and 1-butanol.



- a. Identify **one** step that represents an overall reduction reaction.

---



---

1 mark

- b. Write a balanced equation for step 4 where, in a single reaction, 1-butanol reacts to form carbon dioxide as one of the products.

---

1 mark

Glucose can combine with fructose to form the disaccharide, sucrose.

Sucrose (molar mass  $342 \text{ g mol}^{-1}$ ) is highly soluble in water. However, 1-butanol, a much smaller molecule (molar mass  $74 \text{ g mol}^{-1}$ ), is much less soluble in water.

- c. Explain, in terms of the structure of these two molecules, why this is the case.

---



---



---

1 mark

Consider the following two observations about sucrose.

- I Dry sucrose can be mixed with the enzyme sucrase and no significant change will occur.  
 II Sucrose rapidly breaks down into its monosaccharides when a small amount of sucrase is added to a solution of sucrose at room temperature.

- d. Why does the breakdown of sucrose require the presence of both water and sucrase?

---



---



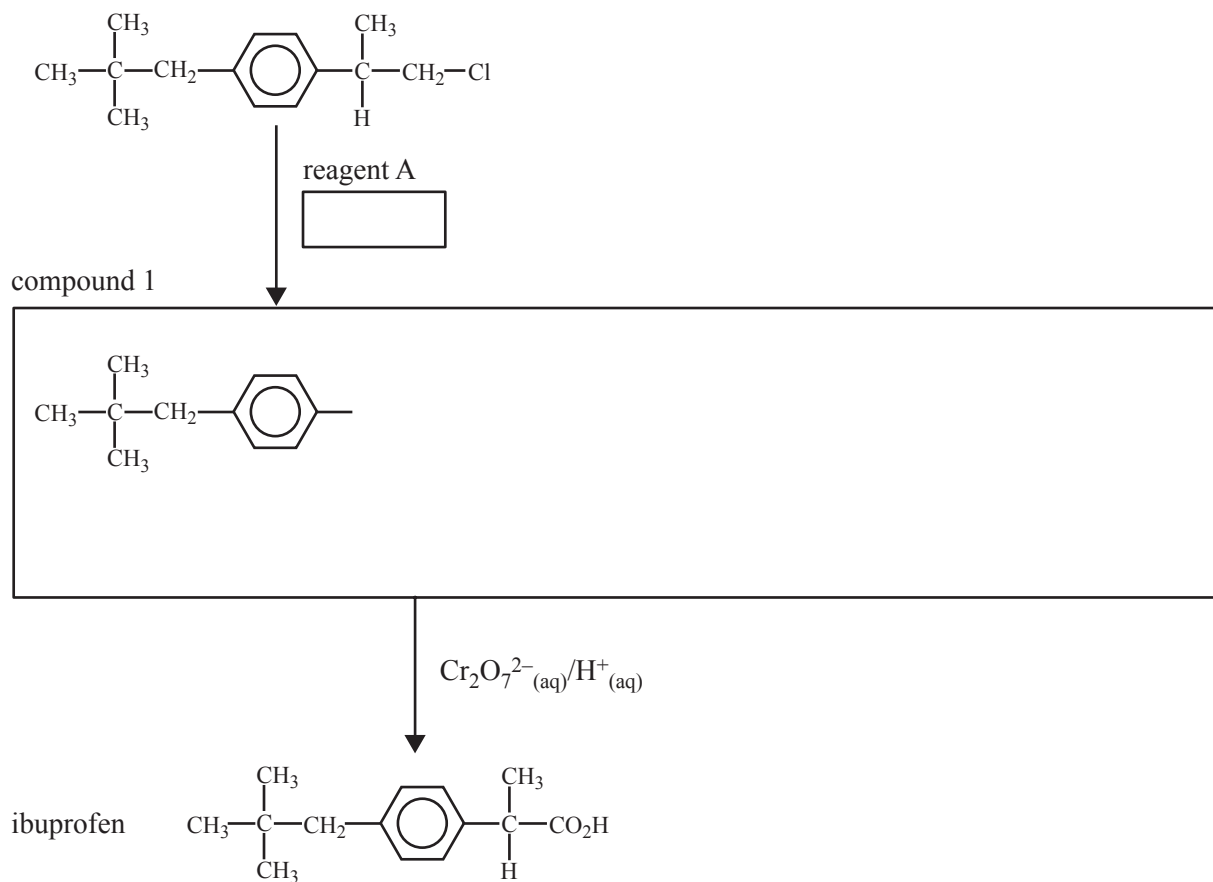
---

1 mark

Total 4 marks

**Question 8**

a. A partially completed reaction pathway for the synthesis of the painkiller ibuprofen is given below.

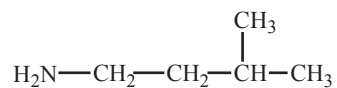


- i. In the appropriate box, write the formula for reagent A.
- ii. In the appropriate box, complete the structure for compound 1.
- iii. Write a balanced half-equation for the reduction of dichromate ions to  $\text{Cr}^{3+}$  ions in an aqueous acid solution.

---

3 marks

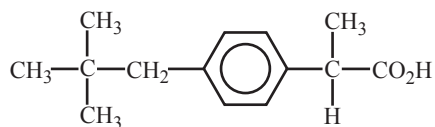
- b. Ibuprofen reacts with compound 2 which has the semi-structural formula shown below.



compound 2

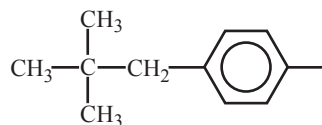
- i. Give the systematic name of compound 2.

- ii. Complete the following structure of the compound formed between ibuprofen and compound 2.



+

compound 2

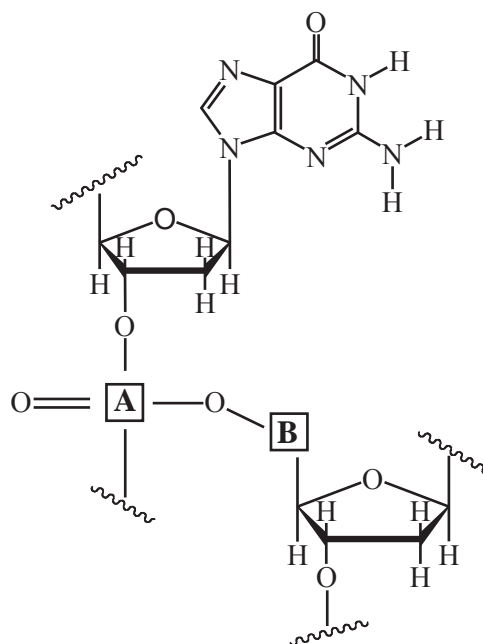


2 marks

Total 5 marks

**Question 9**

- a. The diagram below represents part of the DNA double helix.



- i. Write down the formula of the atom or groups of atoms represented by A and B.

A \_\_\_\_\_

B \_\_\_\_\_

- ii. Name the base that is complementary to the base shown.

\_\_\_\_\_

2 marks

The temperature at which 50% of a piece of double-stranded DNA separates into single strands is known as the melting temperature. A certain human viral DNA contains a greater percentage of adenine than a monkey viral DNA. The lengths of the human and monkey viral DNA molecules are equal.

- b. Explain why the human viral DNA has a lower melting temperature than the monkey viral DNA.

\_\_\_\_\_

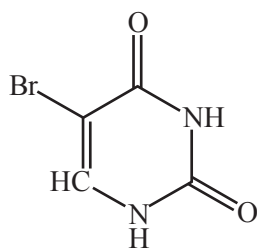
\_\_\_\_\_

\_\_\_\_\_

\_\_\_\_\_

1 mark

Under certain circumstances the compound 5-bromouracil (shown below) is incorporated into the DNA structure in place of one of the normal DNA bases.



c. Which DNA base is likely to be replaced by 5-bromouracil?

---

---

1 mark

Total 4 marks

**Question 10**

Elemental sulfur can be used to control outbreaks of powdery mildew on grapes. However, sulfur remaining on the grapes after harvest can be converted to a number of undesirable compounds during fermentation in wine production.

A wine chemist uses atomic absorption spectroscopy to determine the amount of sulfur remaining on grapes.

In a particular analysis, 100.0 g of grapes are treated with 100.0 mL of surfactant solution to remove the sulfur remaining on the grapes when they were harvested.

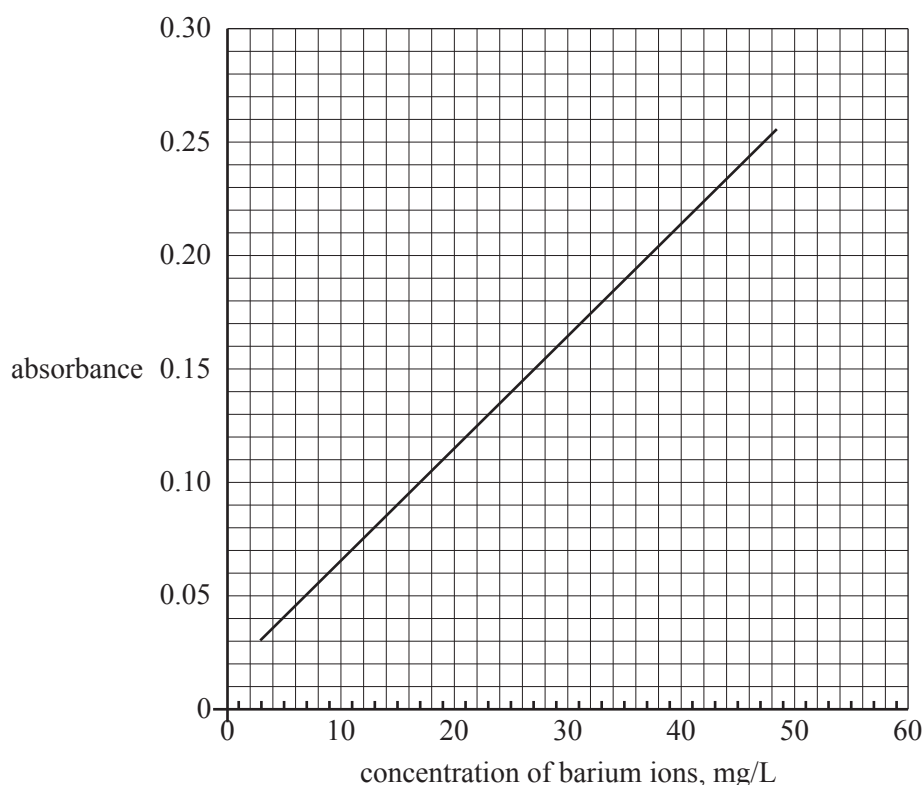
25.00 mL of this surfactant solution is treated to convert all of the sulfur to sulfate ions and then dried to produce an ash containing the sulfate ions.

This ash is transferred to a 10.00 mL volumetric flask containing 2.00 mL of 200 mg/L solution of barium  $\text{Ba}^{2+}$  ions.

The volume of solution in the volumetric flask is then made up to the calibration line. A precipitate of  $\text{BaSO}_4$  forms and settles to the bottom of the volumetric flask.

A small amount of the solution containing the unreacted  $\text{Ba}^{2+}$  ions is removed from the volumetric flask and analysed using atomic absorption spectroscopy. This solution gave an absorbance of 0.11.

A calibration curve was prepared using standard solutions of 10, 20, 30 and 40 mg/L  $\text{Ba}^{2+}$  (aq).



- a. Determine the concentration of barium ions remaining in the 10.00 mL sample solution. Hence determine the mass of barium ions, in mg, remaining in the 10.00 mL sample solution.

---

---

---

2 marks



- b. Determine the amount of barium ions, in moles, that reacted to produce the barium sulfate precipitate.

---

---

---

---

2 marks

- c. Determine the mass of sulfur, in mg, remaining on the 100 g of harvested grapes.

---

---

---

---

2 marks

The amount of sulfur remaining on the grapes can also be determined using gravimetric analysis.

- d. Give **one** reason why atomic absorption spectroscopy is a better way to determine the residual sulfur on the grapes compared to gravimetric analysis.

---

---

1 mark

Total 7 marks



**Victorian Certificate of Education  
2009**

**CHEMISTRY**  
**Written examination**

**Wednesday 10 June 2009**

**Reading time: 11.45 am to 12.00 noon (15 minutes)**

**Writing time: 12.00 noon to 1.30 pm (1 hour 30 minutes)**

**DATA BOOK**

**Directions to students**

- A question and answer book is provided with this data book.

**Students are NOT permitted to bring mobile phones and/or any other unauthorised electronic devices into the examination room.**

**Table of contents**

	page
1. Periodic table of the elements	3
2. The electrochemical series	4
3. Physical constants	5
4. SI prefixes, their symbols and values	5
5. $^1\text{H}$ NMR data	5–6
6. $^{13}\text{C}$ NMR data	7
7. Infrared absorption data	7
8. 2-amino acids ( $\alpha$ -amino acids)	8–9
9. Formulas of some fatty acids	10
10. Structural formulas of some important biomolecules	10
11. Acid-base indicators	11
12. Acidity constants, $K_a$ , of some weak acids	11
13. Values of molar enthalpy of combustion of some common fuels at 298 K and 101.3 kPa	11

## 1. Periodic table of the elements

1 <b>H</b> 1.0 Hydrogen		4 <b>Be</b> 9.0 Beryllium		79 <b>Au</b> 197.0 Gold		5 <b>B</b> 10.8 Boron		6 <b>C</b> 12.0 Carbon		7 <b>N</b> 14.0 Nitrogen		8 <b>O</b> 16.0 Oxygen		9 <b>F</b> 19.0 Fluorine		2 <b>He</b> 4.0 Helium																							
atomic number				symbol of element				relative atomic mass				name of element																											
3	<b>Li</b> 6.9 Lithium	11	<b>Na</b> 23.0 Sodium	19	<b>K</b> 39.1 Potassium	20	<b>Ca</b> 40.1 Calcium	37	<b>Rb</b> 85.5 Rubidium	55	<b>Cs</b> 132.9 Caesium	87	<b>Fr</b> (223) Francium	10	<b>Ne</b> 20.1 Neon	18	<b>Ar</b> 39.9 Argon	36	<b>Kr</b> 83.8 Krypton	54	<b>Xe</b> 131.3 Xenon	86	<b>Rn</b> (222) Radon	118	<b>Uuo</b>														
21	<b>Sc</b> 44.9 Scandium	22	<b>Ti</b> 47.9 Titanium	23	<b>V</b> 50.9 Vanadium	24	<b>Cr</b> 52.0 Chromium	25	<b>Mn</b> 54.9 Manganese	26	<b>Fe</b> 55.9 Iron	27	<b>Co</b> 58.9 Cobalt	28	<b>Ni</b> 58.7 Nickel	29	<b>Cu</b> 63.6 Copper	30	<b>Zn</b> 65.4 Zinc	31	<b>Ga</b> 69.7 Gallium	32	<b>Ge</b> 72.6 Germanium	33	<b>As</b> 74.9 Arsenic	34	<b>Se</b> 79.0 Selenium	35	<b>Br</b> 79.9 Bromine	51	<b>Sb</b> 121.8 Antimony	52	<b>Te</b> 127.6 Tellurium	83	<b>Bi</b> 209.0 Bismuth	84	<b>Po</b> (209) Polonium	114	<b>Uuq</b>
39	<b>Y</b> 88.9 Yttrium	40	<b>Zr</b> 91.2 Zirconium	41	<b>Nb</b> 92.9 Niobium	42	<b>Mo</b> 95.9 Molybdenum	43	<b>Tc</b> 98.1 Technetium	44	<b>Ru</b> 101.1 Ruthenium	45	<b>Rh</b> 102.9 Rhodium	46	<b>Pd</b> 106.4 Palladium	47	<b>Ag</b> 107.9 Silver	48	<b>Cd</b> 112.4 Cadmium	49	<b>In</b> 114.8 Indium	50	<b>Tl</b> 118.7 Thallium	81	<b>Tl</b> 204.4 Thallium	82	<b>Pb</b> 207.2 Lead	85	<b>I</b> 126.9 Iodine	85	<b>At</b> (210) Astatine	115	<b>Uup</b>						
57	<b>La</b> 138.9 Lanthanum	72	<b>Hf</b> 178.5 Hafnium	73	<b>Ta</b> 180.9 Tantalum	74	<b>W</b> 183.8 Tungsten	75	<b>Re</b> 186.2 Rhenium	76	<b>Os</b> 190.2 Osmium	77	<b>Ir</b> 192.2 Iridium	78	<b>Pt</b> 195.1 Platinum	79	<b>Au</b> 197.0 Gold	80	<b>Hg</b> 200.6 Mercury	81	<b>Tl</b> 204.4 Thallium	108	<b>Hs</b> (277) Hassium	109	<b>Mt</b> (268) Meitnerium	110	<b>Ds</b> (271) Darmstadtium	111	<b>Rg</b> (272) Roentgenium	112	<b>Uub</b>								
89	<b>Ac</b> (227) Actinium	104	<b>Rf</b> (261) Rutherfordium	105	<b>Db</b> (262) Dubnium	106	<b>Sg</b> (266) Seaborgium	107	<b>Bh</b> (264) Bohrium	108	<b>Hs</b> (277) Hassium	109	<b>Mt</b> (268) Meitnerium	110	<b>Ds</b> (271) Darmstadtium	111	<b>Rg</b> (272) Roentgenium	112	<b>Uub</b>	116	<b>Uuh</b>	117	<b>Uue</b>	118	<b>Uuo</b>	119	<b>Uuq</b>	120	<b>Uuq</b>										
58	<b>Ce</b> 140.1 Cerium	59	<b>Pr</b> 140.9 Praseodymium	60	<b>Nd</b> 144.2 Neodymium	61	<b>Pm</b> (145) Promethium	62	<b>Sm</b> 150.3 Samarium	63	<b>Eu</b> 152.0 Europium	64	<b>Gd</b> 157.2 Gadolinium	65	<b>Tb</b> 158.9 Terbium	66	<b>Dy</b> 162.5 Dysprosium	67	<b>Ho</b> 164.9 Holmium	68	<b>Er</b> 167.3 Erbium	69	<b>Tm</b> 168.9 Thulium	70	<b>Yb</b> 173.0 Ytterbium	71	<b>Lu</b> 175.0 Lutetium	98	<b>Cf</b> (285) Californium	99	<b>Es</b> (287) Einsteinium	100	<b>Fm</b> (287) Fermium	101	<b>Md</b> (288) Mendelevium	102	<b>No</b> (289) Nobelium	103	<b>Lr</b> (262) Lawrencium
90	<b>Th</b> 232.0 Thorium	91	<b>Pa</b> 231.0 Protactinium	92	<b>U</b> 238.0 Uranium	93	<b>Np</b> (237.0) Neptunium	94	<b>Pu</b> (244) Plutonium	95	<b>Am</b> (243) Americium	96	<b>Cm</b> (247) Curium	97	<b>Bk</b> (247) Berkelium	98	<b>Cf</b> (285) Californium	99	<b>Es</b> (287) Einsteinium	100	<b>Fm</b> (287) Fermium	101	<b>Md</b> (288) Mendelevium	102	<b>No</b> (289) Nobelium	103	<b>Lr</b> (262) Lawrencium												

TURN OVER

**2. The electrochemical series**

	$E^\circ$ in volt
$\text{F}_2(\text{g}) + 2\text{e}^- \rightleftharpoons 2\text{F}^-(\text{aq})$	+2.87
$\text{H}_2\text{O}_2(\text{aq}) + 2\text{H}^+(\text{aq}) + 2\text{e}^- \rightleftharpoons 2\text{H}_2\text{O}(\text{l})$	+1.77
$\text{Au}^+(\text{aq}) + \text{e}^- \rightleftharpoons \text{Au}(\text{s})$	+1.68
$\text{Cl}_2(\text{g}) + 2\text{e}^- \rightleftharpoons 2\text{Cl}^-(\text{aq})$	+1.36
$\text{O}_2(\text{g}) + 4\text{H}^+(\text{aq}) + 4\text{e}^- \rightleftharpoons 2\text{H}_2\text{O}(\text{l})$	+1.23
$\text{Br}_2(\text{l}) + 2\text{e}^- \rightleftharpoons 2\text{Br}^-(\text{aq})$	+1.09
$\text{Ag}^+(\text{aq}) + \text{e}^- \rightleftharpoons \text{Ag}(\text{s})$	+0.80
$\text{Fe}^{3+}(\text{aq}) + \text{e}^- \rightleftharpoons \text{Fe}^{2+}(\text{aq})$	+0.77
$\text{O}_2(\text{g}) + 2\text{H}^+(\text{aq}) + 2\text{e}^- \rightleftharpoons \text{H}_2\text{O}_2(\text{aq})$	+0.68
$\text{I}_2(\text{s}) + 2\text{e}^- \rightleftharpoons 2\text{I}^-(\text{aq})$	+0.54
$\text{O}_2(\text{g}) + 2\text{H}_2\text{O}(\text{l}) + 4\text{e}^- \rightleftharpoons 4\text{OH}^-(\text{aq})$	+0.40
$\text{Cu}^{2+}(\text{aq}) + 2\text{e}^- \rightleftharpoons \text{Cu}(\text{s})$	+0.34
$\text{Sn}^{4+}(\text{aq}) + 2\text{e}^- \rightleftharpoons \text{Sn}^{2+}(\text{aq})$	+0.15
$\text{S}(\text{s}) + 2\text{H}^+(\text{aq}) + 2\text{e}^- \rightleftharpoons \text{H}_2\text{S}(\text{g})$	+0.14
$2\text{H}^+(\text{aq}) + 2\text{e}^- \rightleftharpoons \text{H}_2(\text{g})$	0.00
$\text{Pb}^{2+}(\text{aq}) + 2\text{e}^- \rightleftharpoons \text{Pb}(\text{s})$	-0.13
$\text{Sn}^{2+}(\text{aq}) + 2\text{e}^- \rightleftharpoons \text{Sn}(\text{s})$	-0.14
$\text{Ni}^{2+}(\text{aq}) + 2\text{e}^- \rightleftharpoons \text{Ni}(\text{s})$	-0.23
$\text{Co}^{2+}(\text{aq}) + 2\text{e}^- \rightleftharpoons \text{Co}(\text{s})$	-0.28
$\text{Fe}^{2+}(\text{aq}) + 2\text{e}^- \rightleftharpoons \text{Fe}(\text{s})$	-0.44
$\text{Zn}^{2+}(\text{aq}) + 2\text{e}^- \rightleftharpoons \text{Zn}(\text{s})$	-0.76
$2\text{H}_2\text{O}(\text{l}) + 2\text{e}^- \rightleftharpoons \text{H}_2(\text{g}) + 2\text{OH}^-(\text{aq})$	-0.83
$\text{Mn}^{2+}(\text{aq}) + 2\text{e}^- \rightleftharpoons \text{Mn}(\text{s})$	-1.03
$\text{Al}^{3+}(\text{aq}) + 3\text{e}^- \rightleftharpoons \text{Al}(\text{s})$	-1.67
$\text{Mg}^{2+}(\text{aq}) + 2\text{e}^- \rightleftharpoons \text{Mg}(\text{s})$	-2.34
$\text{Na}^+(\text{aq}) + \text{e}^- \rightleftharpoons \text{Na}(\text{s})$	-2.71
$\text{Ca}^{2+}(\text{aq}) + 2\text{e}^- \rightleftharpoons \text{Ca}(\text{s})$	-2.87
$\text{K}^+(\text{aq}) + \text{e}^- \rightleftharpoons \text{K}(\text{s})$	-2.93
$\text{Li}^+(\text{aq}) + \text{e}^- \rightleftharpoons \text{Li}(\text{s})$	-3.02

### 3. Physical constants

Avogadro's constant ( $N_A$ ) =  $6.02 \times 10^{23} \text{ mol}^{-1}$

Charge on one electron =  $-1.60 \times 10^{-19} \text{ C}$

Faraday constant ( $F$ ) =  $96\,500 \text{ C mol}^{-1}$

Gas constant ( $R$ ) =  $8.31 \text{ J K}^{-1} \text{ mol}^{-1}$

Ionic product for water ( $K_w$ ) =  $1.00 \times 10^{-14} \text{ mol}^2 \text{ L}^{-2}$  at 298 K  
(Self ionisation constant)

Molar volume ( $V_m$ ) of an ideal gas at 273 K, 101.3 kPa (STP) =  $22.4 \text{ L mol}^{-1}$

Molar volume ( $V_m$ ) of an ideal gas at 298 K, 101.3 kPa (SLC) =  $24.5 \text{ L mol}^{-1}$

Specific heat capacity ( $c$ ) of water =  $4.18 \text{ J g}^{-1} \text{ K}^{-1}$

Density ( $d$ ) of water at 25°C =  $1.00 \text{ g mL}^{-1}$

1 atm = 101.3 kPa = 760 mm Hg

0°C = 273 K

### 4. SI prefixes, their symbols and values

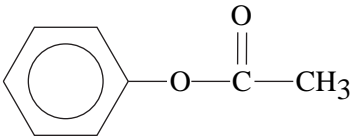
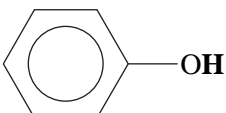
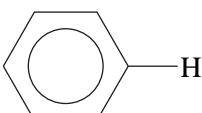
SI prefix	Symbol	Value
giga	G	$10^9$
mega	M	$10^6$
kilo	k	$10^3$
deci	d	$10^{-1}$
centi	c	$10^{-2}$
milli	m	$10^{-3}$
micro	$\mu$	$10^{-6}$
nano	n	$10^{-9}$
pico	p	$10^{-12}$

### 5. $^1\text{H}$ NMR data

Typical proton shift values relative to TMS = 0

These can differ slightly in different solvents. Where more than one proton environment is shown in the formula, the shift refers to the ones in bold letters.

Type of proton	Chemical shift (ppm)
R-CH <sub>3</sub>	0.9
R-CH <sub>2</sub> -R	1.3
RCH = CH- <b>CH<sub>3</sub></b>	1.7
R <sub>3</sub> -CH	2.0
$\text{CH}_3-\overset{\text{O}}{\parallel}{\text{C}}-\text{OR}$ or $\text{CH}_3-\overset{\text{O}}{\parallel}{\text{C}}-\text{NHR}$	2.0

Type of proton	Chemical shift (ppm)
$\begin{array}{c} \text{R} \quad \text{CH}_3 \\ \quad \diagdown \quad / \\ \quad \text{C} \\ \quad    \\ \quad \text{O} \end{array}$	2.1
R-CH <sub>2</sub> -X (X = F, Cl, Br or I)	3-4
R-CH <sub>2</sub> -OH	3.6
$\begin{array}{c} \quad \text{O} \\ \quad // \\ \text{R}-\text{C} \\ \quad \backslash \\ \quad \text{NHCH}_2\text{R} \end{array}$	3.2
R-O-CH <sub>3</sub> or R-O-CH <sub>2</sub> R	3.3
	2.3
$\begin{array}{c} \quad \text{O} \\ \quad // \\ \text{R}-\text{C} \\ \quad \backslash \\ \quad \text{OCH}_2\text{R} \end{array}$	4.1
R-O-H	1-6 (varies considerably under different conditions)
R-NH <sub>2</sub>	1-5
RHC = CH <sub>2</sub>	4.6-6.0
	7.0
	7.3
$\begin{array}{c} \quad \text{O} \\ \quad // \\ \text{R}-\text{C} \\ \quad \backslash \\ \quad \text{NHCH}_2\text{R} \end{array}$	8.1
$\begin{array}{c} \quad \text{O} \\ \quad // \\ \text{R}-\text{C} \\ \quad \backslash \\ \quad \text{H} \end{array}$	9-10
$\begin{array}{c} \quad \text{O} \\ \quad // \\ \text{R}-\text{C} \\ \quad \backslash \\ \quad \text{O}-\text{H} \end{array}$	11.5

**6.  $^{13}\text{C}$  NMR data**

Type of carbon	Chemical shift (ppm)
R-CH <sub>3</sub>	8–25
R-CH <sub>2</sub> -R	20–45
R <sub>3</sub> -CH	40–60
R <sub>4</sub> -C	36–45
R-CH <sub>2</sub> -X	15–80
R <sub>3</sub> C-NH <sub>2</sub>	35–70
R-CH <sub>2</sub> -OH	50–90
RC≡CR	75–95
R <sub>2</sub> C=CR <sub>2</sub>	110–150
RCOOH	160–185

**7. Infrared absorption data**

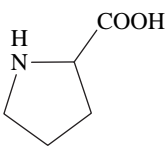
Characteristic range for infrared absorption

Bond	Wave number (cm <sup>-1</sup> )
C-Cl	700–800
C-C	750–1100
C-O	1000–1300
C=C	1610–1680
C=O	1670–1750
O-H (acids)	2500–3300
C-H	2850–3300
O-H (alcohols)	3200–3550
N-H (primary amines)	3350–3500



**8. 2-amino acids ( $\alpha$ -amino acids)**

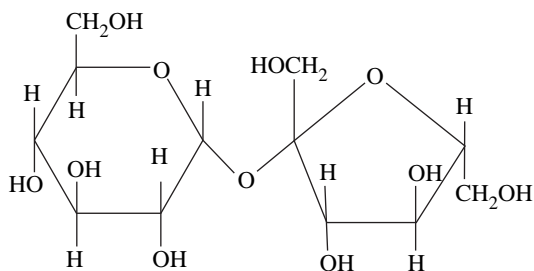
Name	Symbol	Structure
alanine	Ala	$\begin{array}{c} \text{CH}_3 \\   \\ \text{H}_2\text{N}-\text{CH}-\text{COOH} \end{array}$
arginine	Arg	$\begin{array}{c} \text{NH} \\    \\ \text{CH}_2-\text{CH}_2-\text{CH}_2-\text{NH}-\text{C}-\text{NH}_2 \\   \\ \text{H}_2\text{N}-\text{CH}-\text{COOH} \end{array}$
asparagine	Asn	$\begin{array}{c} \text{O} \\    \\ \text{CH}_2-\text{C}-\text{NH}_2 \\   \\ \text{H}_2\text{N}-\text{CH}-\text{COOH} \end{array}$
aspartic acid	Asp	$\begin{array}{c} \text{CH}_2-\text{COOH} \\   \\ \text{H}_2\text{N}-\text{CH}-\text{COOH} \end{array}$
cysteine	Cys	$\begin{array}{c} \text{CH}_2-\text{SH} \\   \\ \text{H}_2\text{N}-\text{CH}-\text{COOH} \end{array}$
glutamine	Gln	$\begin{array}{c} \text{O} \\    \\ \text{CH}_2-\text{CH}_2-\text{C}-\text{NH}_2 \\   \\ \text{H}_2\text{N}-\text{CH}-\text{COOH} \end{array}$
glutamic acid	Glu	$\begin{array}{c} \text{CH}_2-\text{CH}_2-\text{COOH} \\   \\ \text{H}_2\text{N}-\text{CH}-\text{COOH} \end{array}$
glycine	Gly	$\text{H}_2\text{N}-\text{CH}_2-\text{COOH}$
histidine	His	$\begin{array}{c} \text{N} \\ // \quad \backslash \\ \text{CH}_2-\text{C} \quad \text{N}-\text{H} \\   \\ \text{H}_2\text{N}-\text{CH}-\text{COOH} \end{array}$
isoleucine	Ile	$\begin{array}{c} \text{CH}_3-\text{CH}-\text{CH}_2-\text{CH}_3 \\   \\ \text{H}_2\text{N}-\text{CH}-\text{COOH} \end{array}$

Name	Symbol	Structure
leucine	Leu	$\begin{array}{c} \text{CH}_3 - \text{CH} - \text{CH}_3 \\   \\ \text{CH}_2 \\   \\ \text{H}_2\text{N} - \text{CH} - \text{COOH} \end{array}$
lysine	Lys	$\begin{array}{c} \text{CH}_2 - \text{CH}_2 - \text{CH}_2 - \text{CH}_2 - \text{NH}_2 \\   \\ \text{H}_2\text{N} - \text{CH} - \text{COOH} \end{array}$
methionine	Met	$\begin{array}{c} \text{CH}_2 - \text{CH}_2 - \text{S} - \text{CH}_3 \\   \\ \text{H}_2\text{N} - \text{CH} - \text{COOH} \end{array}$
phenylalanine	Phe	$\begin{array}{c} \text{CH}_2 - \text{C}_6\text{H}_5 \\   \\ \text{H}_2\text{N} - \text{CH} - \text{COOH} \end{array}$
proline	Pro	
serine	Ser	$\begin{array}{c} \text{CH}_2 - \text{OH} \\   \\ \text{H}_2\text{N} - \text{CH} - \text{COOH} \end{array}$
threonine	Thr	$\begin{array}{c} \text{CH}_3 - \text{CH} - \text{OH} \\   \\ \text{H}_2\text{N} - \text{CH} - \text{COOH} \end{array}$
tryptophan	Trp	$\begin{array}{c} \text{CH}_2 - \text{C}_8\text{H}_6\text{N}_2 \\   \\ \text{H}_2\text{N} - \text{CH} - \text{COOH} \end{array}$
tyrosine	Tyr	$\begin{array}{c} \text{CH}_2 - \text{C}_6\text{H}_4 - \text{OH} \\   \\ \text{H}_2\text{N} - \text{CH} - \text{COOH} \end{array}$
valine	Val	$\begin{array}{c} \text{CH}_3 - \text{CH} - \text{CH}_3 \\   \\ \text{H}_2\text{N} - \text{CH} - \text{COOH} \end{array}$

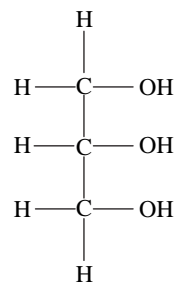
### 9. Formulas of some fatty acids

Name	Formula
Lauric	$C_{11}H_{23}COOH$
Myristic	$C_{13}H_{27}COOH$
Palmitic	$C_{15}H_{31}COOH$
Palmitoleic	$C_{15}H_{29}COOH$
Stearic	$C_{17}H_{35}COOH$
Oleic	$C_{17}H_{33}COOH$
Linoleic	$C_{17}H_{31}COOH$
Linolenic	$C_{17}H_{29}COOH$
Arachidic	$C_{19}H_{39}COOH$
Arachidonic	$C_{19}H_{31}COOH$

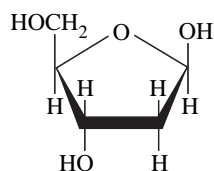
### 10. Structural formulas of some important biomolecules



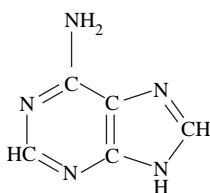
sucrose



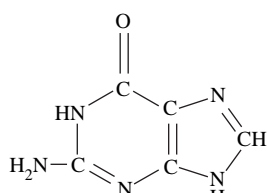
glycerol



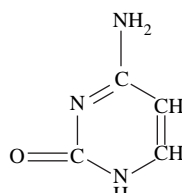
deoxyribose



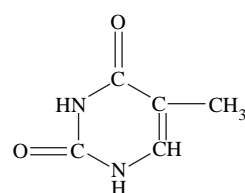
adenine



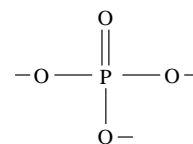
guanine



cytosine



thymine



phosphate

**11. Acid-base indicators**

Name	pH range	Colour change		$K_a$
		Acid	Base	
Thymol blue	1.2–2.8	red	yellow	$2 \times 10^{-2}$
Methyl orange	3.1–4.4	red	yellow	$2 \times 10^{-4}$
Bromophenol blue	3.0–4.6	yellow	blue	$6 \times 10^{-5}$
Methyl red	4.2–6.3	red	yellow	$8 \times 10^{-6}$
Bromothymol blue	6.0–7.6	yellow	blue	$1 \times 10^{-7}$
Phenol red	6.8–8.4	yellow	red	$1 \times 10^{-8}$
Phenolphthalein	8.3–10.0	colourless	red	$5 \times 10^{-10}$

**12. Acidity constants,  $K_a$ , of some weak acids**

Name	Formula	$K_a$
Ammonium ion	$\text{NH}_4^+$	$5.6 \times 10^{-10}$
Benzoic	$\text{C}_6\text{H}_5\text{COOH}$	$6.4 \times 10^{-5}$
Boric	$\text{H}_3\text{BO}_3$	$5.8 \times 10^{-10}$
Ethanoic	$\text{CH}_3\text{COOH}$	$1.7 \times 10^{-5}$
Hydrocyanic	$\text{HCN}$	$6.3 \times 10^{-10}$
Hydrofluoric	$\text{HF}$	$7.6 \times 10^{-4}$
Hypobromous	$\text{HOBr}$	$2.4 \times 10^{-9}$
Hypochlorous	$\text{HOCl}$	$2.9 \times 10^{-8}$
Lactic	$\text{HC}_3\text{H}_5\text{O}_3$	$1.4 \times 10^{-4}$
Methanoic	$\text{HCOOH}$	$1.8 \times 10^{-4}$
Nitrous	$\text{HNO}_2$	$7.2 \times 10^{-4}$
Propanoic	$\text{C}_2\text{H}_5\text{COOH}$	$1.3 \times 10^{-5}$

**13. Values of molar enthalpy of combustion of some common fuels at 298 K and 101.3 kPa**

Substance	Formula	State	$\Delta H_c$ (kJ mol <sup>-1</sup> )
hydrogen	$\text{H}_2$	g	-286
carbon (graphite)	C	s	-394
methane	$\text{CH}_4$	g	-889
ethane	$\text{C}_2\text{H}_6$	g	-1557
propane	$\text{C}_3\text{H}_8$	g	-2217
butane	$\text{C}_4\text{H}_{10}$	g	-2874
pentane	$\text{C}_5\text{H}_{12}$	l	-3509
hexane	$\text{C}_6\text{H}_{14}$	l	-4158
octane	$\text{C}_8\text{H}_{18}$	l	-5464
ethene	$\text{C}_2\text{H}_4$	g	-1409
methanol	$\text{CH}_3\text{OH}$	l	-725
ethanol	$\text{C}_2\text{H}_5\text{OH}$	l	-1364
1-propanol	$\text{CH}_3\text{CH}_2\text{CH}_2\text{OH}$	l	-2016
2-propanol	$\text{CH}_3\text{CHOHCH}_3$	l	-2003
glucose	$\text{C}_6\text{H}_{12}\text{O}_6$	s	-2816