

Chapter 8 – Refer to pages to help you answer the questions

Summary sheet 1

- Define key terms using your text book (page 292)

Summary sheet 2

- Provide two economic, environmental and social characteristics of low-, middle- and high-income countries

Summary sheet 3

- Outline **similarities** in health status and burden of disease in low-, middle- and high-income countries

Summary sheet 4

- Outline **differences** in health status and burden of disease in low-, middle- and high-income countries

Summary sheet 5 (a and b)

- Evaluate the data to describe similarities and differences between countries in relation to health status and burden of disease (answer the corresponding questions to the data)

Summary sheet 6

- Describe each of the factors that contribute to burden of disease in different countries

Summary sheet 7

- Poverty can prevent access to these resources – fill in the gaps (use page 318 to assist you)

Summary sheet 8

- For each of the factors that contribute to burden of disease in different countries discuss the impact on health and wellbeing

DEFINITIONS

①

✓ AIDS (Acquired immune deficiency syndrome)

-

✓ Communicable diseases

-

✓ Extreme poverty

-

✓ Gross domestic product (GDP)

-

✓ Gross domestic income (GDI)

-

✓ Non-communicable diseases

-

✓ Urban slums

-

ECONOMIC:

High:

1.

2.

Middle:

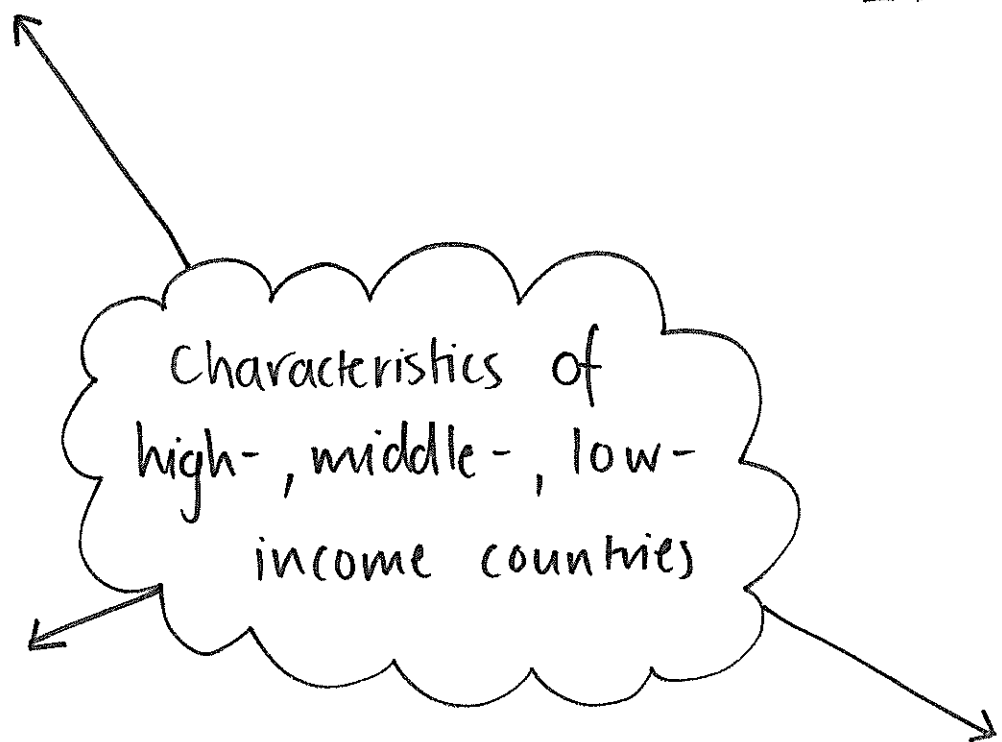
1.

2.

Low:

1.

2.



SOCIAL:

High:

1.

2.

Middle:

1.

2.

Low:

1.

2.

ENVIRONMENTAL:

High:

1.

2.

Middle:

1.

2.

Low:

1.

2.

SIMILARITIES IN HEALTH-STATUS
AND BURDEN OF DISEASE

③

LOW-INCOME:

MIDDLE-INCOME:

HIGH INCOME:

* DIFFERENCES * IN HEALTH-STATUS
AND BURDEN OF DISEASE

(4)

LOW-INCOME:

MIDDLE-INCOME:

HIGH INCOME:

Question 1

The following table shows a range of indicators for Australia and Rwanda, a low-income country in Africa.

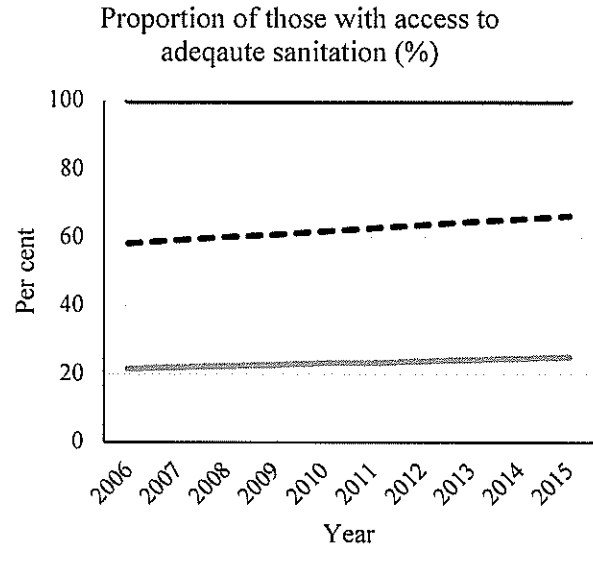
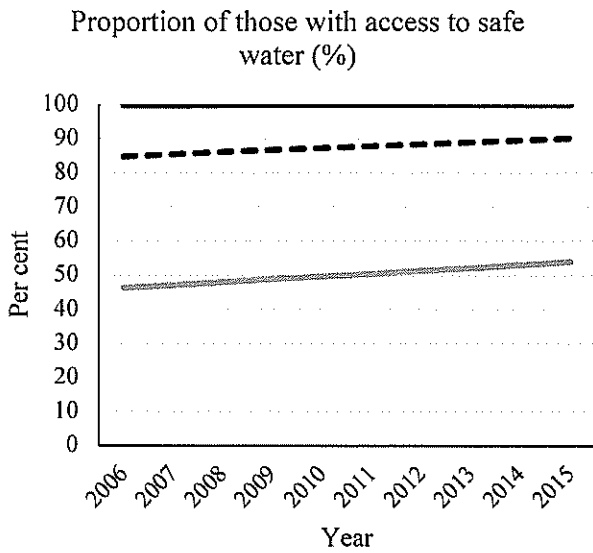
	GNI per capita (\$)	U5MR (per 1000 live births)	Life expectancy (both sexes)	Access to electricity (% of population)	Maternal mortality (per 100 000 live births)	Current health expenditure (US\$) per capita
Australia	45 210	3.7	82.8	100	6	4 934
Rwanda	1 860	38.5	66.1	29	290	57

Source: WHO and World Bank, 2018.

Using data, draw a conclusion relating to health status in Australia compared to Rwanda.

Question 2

The following graphs show the proportion of people with access to safe water and adequate sanitation in Australia, middle-income and low-income countries.



— Australia - - - Middle-income Low-income

Using data, outline the difference in the proportion of those who have access to safe water and adequate sanitation between Australia, middle- and low-income countries.

FACTORS THAT CONTRIBUTE TO BURDEN OF DISEASE IN DIFFERENT COUNTRIES: ⑥

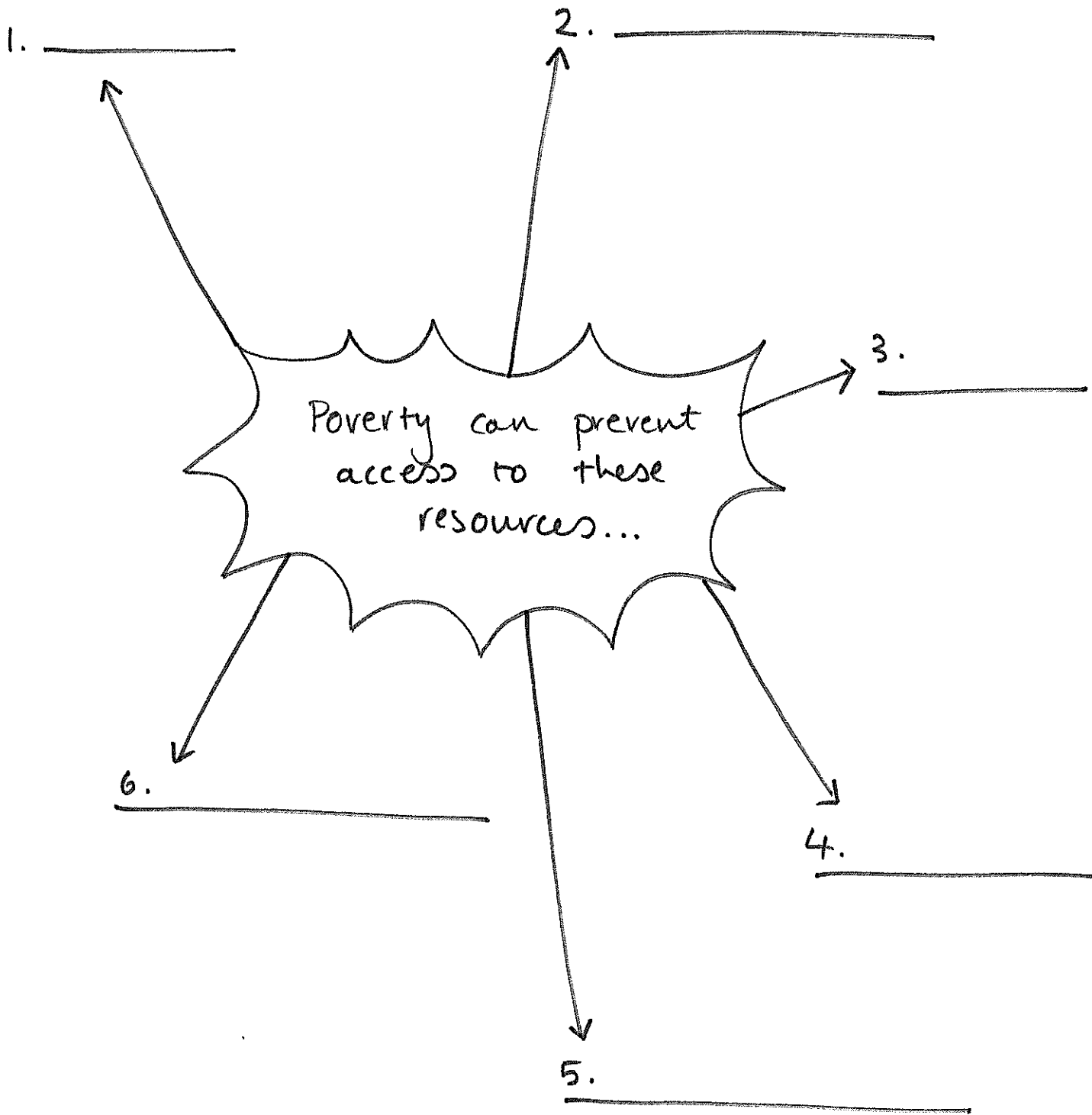
• ACCESS TO SAFE WATER:

• SANITATION:

• POVERTY:

• INEQUALITY + DISCRIMINATION: (race, sex, sexual orientation, gender identity)

• GLOBAL DISTRIBUTION + MARKETING OF TOBACCO, ALCOHOL + PROCESSED FOODS:



• ACCESS to safe water:

- impact on H&W?

• SANITATION:

- impact on H&W?

• POVERTY:

- impact on H&W?

• INEQUALITY + DISCRIMINATION: (race, sex, sexual orientation + gender identity)

- impact on H&W?

• GLOBAL DISTRIBUTION + MARKETING of tobacco, alcohol, + processed foods:

- impact on H&W?